


Nama: \_\_\_\_\_

Tarikh: \_\_\_\_\_


# Kira dan Warna

Warnakan buah berdasarkan nilai nombor yang diberi.

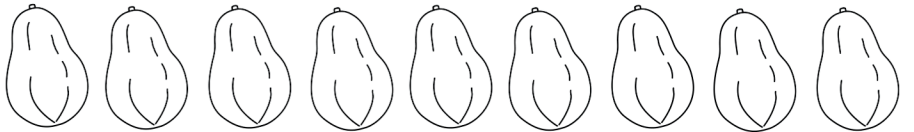
4




7



8



9



6



3



5




Nama: \_\_\_\_\_

Tarikh: \_\_\_\_\_


# Kira dan Warna

Warnakan sayur berdasarkan nilai nombor yang diberi.

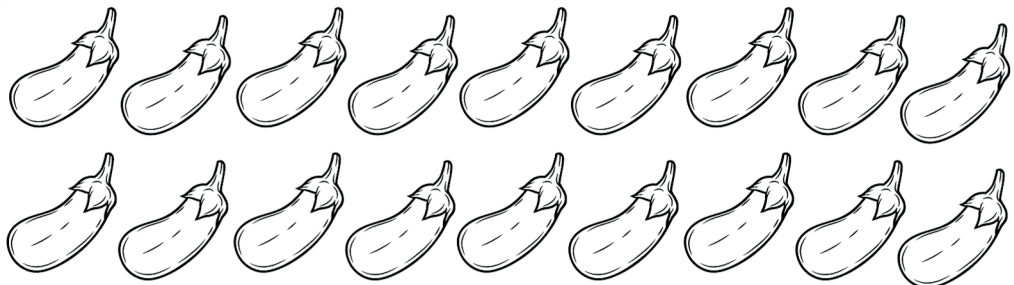
10




12



15



18




Nama: \_\_\_\_\_

Tarikh: \_\_\_\_\_


# Kira dan Warna

Warnakan sayur berdasarkan nilai nombor yang diberi.

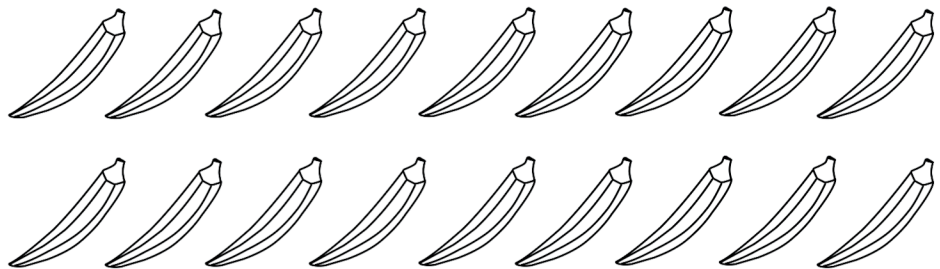
16



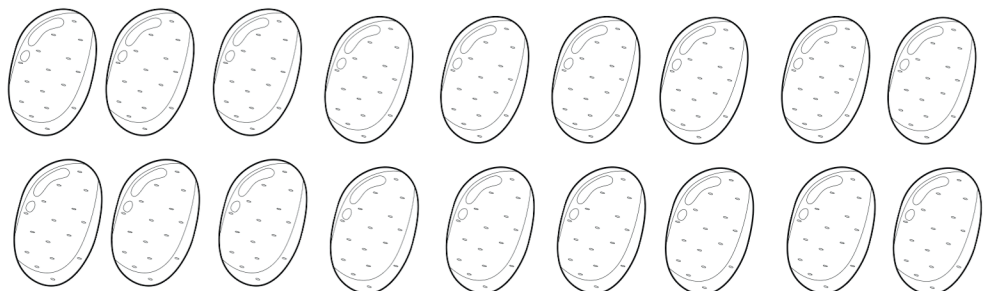
13



14



11












Nama: \_\_\_\_\_

Tarikh: \_\_\_\_\_

# JOM KIRA BUAH-BUAHAN!

Kira dan tulis jawapan anda dalam kotak di bawah.



	<input type="text"/>		<input type="text"/>		<input type="text"/>		<input type="text"/>
	<input type="text"/>		<input type="text"/>		<input type="text"/>		<input type="text"/>



Nama: \_\_\_\_\_

Tarikh: \_\_\_\_\_

# Operasi Tambah



Kira jumlah tambah di bawah.

Contoh :

$$\begin{array}{r} 6 \\ +3 \\ \hline 9 \\ \hline \end{array}$$

$$\begin{array}{r} 2 \\ +4 \\ \hline \\ \hline \end{array}$$

$$\begin{array}{r} 5 \\ +1 \\ \hline \\ \hline \end{array}$$

$$\begin{array}{r} 8 \\ +2 \\ \hline \\ \hline \end{array}$$

$$\begin{array}{r} 7 \\ +3 \\ \hline \\ \hline \end{array}$$

$$\begin{array}{r} 2 \\ +7 \\ \hline \\ \hline \end{array}$$

$$\begin{array}{r} 9 \\ +1 \\ \hline \\ \hline \end{array}$$

$$\begin{array}{r} 5 \\ +2 \\ \hline \\ \hline \end{array}$$

$$\begin{array}{r} 6 \\ +4 \\ \hline \\ \hline \end{array}$$

$$\begin{array}{r} 2 \\ +2 \\ \hline \\ \hline \end{array}$$

$$\begin{array}{r} 5 \\ +7 \\ \hline \\ \hline \end{array}$$

$$\begin{array}{r} 7 \\ +2 \\ \hline \\ \hline \end{array}$$

$$\begin{array}{r} 5 \\ +3 \\ \hline \\ \hline \end{array}$$

$$\begin{array}{r} 2 \\ +9 \\ \hline \\ \hline \end{array}$$

$$\begin{array}{r} 4 \\ +1 \\ \hline \\ \hline \end{array}$$

$$\begin{array}{r} 5 \\ +7 \\ \hline \\ \hline \end{array}$$

# LATIH TUBI OPERASI TAMBAH

Nama: \_\_\_\_\_

Tarikh: \_\_\_\_\_

Contoh:

$1 + 1 = \underline{2}$

$6 + 6 = \underline{\quad}$

$8 + 9 = \underline{\quad}$

$1 + 2 = \underline{\quad}$

$2 + 6 = \underline{\quad}$

$9 + 1 = \underline{\quad}$

$2 + 2 = \underline{\quad}$

$6 + 7 = \underline{\quad}$

$9 + 2 = \underline{\quad}$

$1 + 3 = \underline{\quad}$

$6 + 8 = \underline{\quad}$

$3 + 9 = \underline{\quad}$

$2 + 3 = \underline{\quad}$

$6 + 9 = \underline{\quad}$

$4 + 9 = \underline{\quad}$

$3 + 3 = \underline{\quad}$

$1 + 7 = \underline{\quad}$

$5 + 9 = \underline{\quad}$

$4 + 1 = \underline{\quad}$

$2 + 7 = \underline{\quad}$

$9 + 6 = \underline{\quad}$

$2 + 4 = \underline{\quad}$

$7 + 3 = \underline{\quad}$

$9 + 7 = \underline{\quad}$

$3 + 4 = \underline{\quad}$

$4 + 7 = \underline{\quad}$

$8 + 9 = \underline{\quad}$

$4 + 4 = \underline{\quad}$

$5 + 7 = \underline{\quad}$

$9 + 9 = \underline{\quad}$

$5 + 2 = \underline{\quad}$

$7 + 6 = \underline{\quad}$

$2 + 10 = \underline{\quad}$

$5 + 3 = \underline{\quad}$

$7 + 7 = \underline{\quad}$

$3 + 10 = \underline{\quad}$

$4 + 5 = \underline{\quad}$

$8 + 7 = \underline{\quad}$

$4 + 10 = \underline{\quad}$

$5 + 5 = \underline{\quad}$

$9 + 7 = \underline{\quad}$

$5 + 10 = \underline{\quad}$

$5 + 1 = \underline{\quad}$

$1 + 8 = \underline{\quad}$

$6 + 10 = \underline{\quad}$

$1 + 6 = \underline{\quad}$

$8 + 2 = \underline{\quad}$

$7 + 10 = \underline{\quad}$

$6 + 2 = \underline{\quad}$

$3 + 8 = \underline{\quad}$

$8 + 10 = \underline{\quad}$

$3 + 6 = \underline{\quad}$

$8 + 8 = \underline{\quad}$

$9 + 10 = \underline{\quad}$

$4 + 6 = \underline{\quad}$

$5 + 8 = \underline{\quad}$

$10 + 10 = \underline{\quad}$

$6 + 5 = \underline{\quad}$

$7 + 5 = \underline{\quad}$

$1 + 10 = \underline{\quad}$




Nama: \_\_\_\_\_


Tarikh: \_\_\_\_\_


# LATIH TUBI OPERASI TAMBAH


Selesaikan latihan dan tulis jawapan yang betul.


Contoh:


$7+1=$   **8**


$1+2=$  


$5+3=$  


$6+2=$  


$2+0=$  


$3+4=$  


$5+0=$  


$3+1=$  


$5+2=$  


$9+0=$  


$4+4=$  


$3+4=$  


$2+4=$  


$5+5=$  


$1+3=$  


$3+1=$  

$4+6=$  

$3+4=$  

$2+6=$  

$3+3=$  

$2+6=$  



Nama: \_\_\_\_\_

Tarikh: \_\_\_\_\_

# LATIH TUBI OPERASI TAMBAH

Selesaikan latihan dan tulis jawapan yang betul.

$11 + 5 = \underline{\hspace{2cm}}$

$4 + 13 = \underline{\hspace{2cm}}$

$16 + 8 = \underline{\hspace{2cm}}$

$9 + 13 = \underline{\hspace{2cm}}$

$12 + 7 = \underline{\hspace{2cm}}$

$4 + 12 = \underline{\hspace{2cm}}$

$10 + 9 = \underline{\hspace{2cm}}$

$8 + 12 = \underline{\hspace{2cm}}$

$12 + 5 = \underline{\hspace{2cm}}$

$7 + 8 = \underline{\hspace{2cm}}$

$11 + 6 = \underline{\hspace{2cm}}$

$1 + 12 = \underline{\hspace{2cm}}$

$0 + 13 = \underline{\hspace{2cm}}$

$9 + 7 = \underline{\hspace{2cm}}$

$9 + 11 = \underline{\hspace{2cm}}$

$17 + 2 = \underline{\hspace{2cm}}$

$5 + 14 = \underline{\hspace{2cm}}$

$9 + 2 = \underline{\hspace{2cm}}$

$11 + 6 = \underline{\hspace{2cm}}$

$15 + 4 = \underline{\hspace{2cm}}$

$2 + 15 = \underline{\hspace{2cm}}$

$1 + 18 = \underline{\hspace{2cm}}$

$14 + 6 = \underline{\hspace{2cm}}$

$12 + 0 = \underline{\hspace{2cm}}$

$2 + 14 = \underline{\hspace{2cm}}$

$10 + 10 = \underline{\hspace{2cm}}$

$1 + 19 = \underline{\hspace{2cm}}$

$3 + 12 = \underline{\hspace{2cm}}$

$7 + 13 = \underline{\hspace{2cm}}$

$9 + 10 = \underline{\hspace{2cm}}$

$12 + 4 = \underline{\hspace{2cm}}$

$8 + 10 = \underline{\hspace{2cm}}$

$10 + 3 = \underline{\hspace{2cm}}$

$11 + 9 = \underline{\hspace{2cm}}$

$14 + 0 = \underline{\hspace{2cm}}$

$13 + 5 = \underline{\hspace{2cm}}$

$20 + 0 = \underline{\hspace{2cm}}$

$5 + 6 = \underline{\hspace{2cm}}$

$7 + 4 = \underline{\hspace{2cm}}$

$7 + 6 = \underline{\hspace{2cm}}$

$9 + 5 = \underline{\hspace{2cm}}$

$3 + 9 = \underline{\hspace{2cm}}$

$4 + 6 = \underline{\hspace{2cm}}$

$4 + 9 = \underline{\hspace{2cm}}$

$13 + 5 = \underline{\hspace{2cm}}$



Nama: \_\_\_\_\_

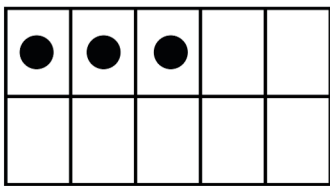
Tarikh: \_\_\_\_\_

# LATIH TUBI OPERASI TAMBAH

Letakkan titik (●) pada setiap ruang petak berdasarkan nilai yang diberi dan selesaikan operasi tambah di bawah.

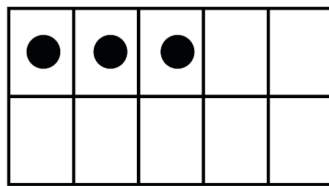
Contoh:

**3**



+

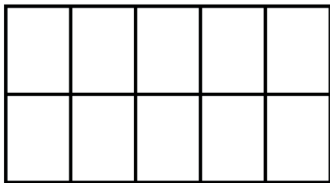
**3**



=

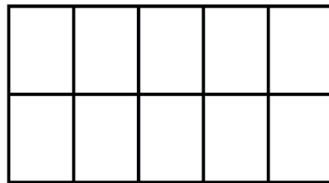
**6**

**5**



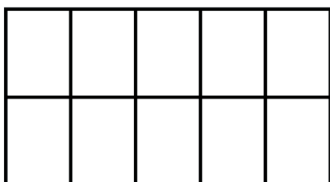
+

**2**



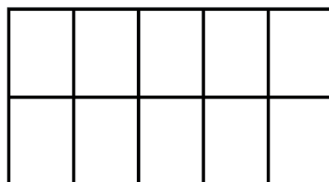
=

**9**



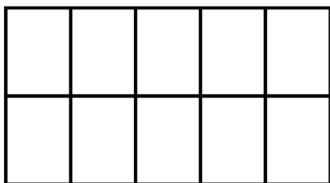
+

**2**



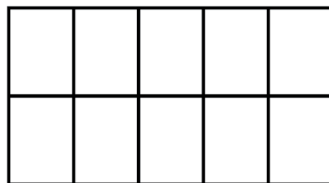
=

**6**



+

**7**



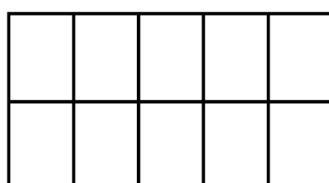
=

**3**



+

**9**



=

Nama: \_\_\_\_\_

Tarikh: \_\_\_\_\_

# LATIH TUBI OPERASI TAMBAH

Letakkan titik (●) pada setiap ruang petak berdasarkan nilai yang diberi dan selesaikan operasi tambah di bawah.

Contoh :

**6**

●	●	●	●	●
●				

**+**

**6**

●	●	●	●	●
●				

**=**

<b>12</b>
-----------

**2**


**+**

**2**


**=**

--

**8**


**+**

**8**


**=**

--

**7**


**+**

**7**


**=**

--

**8**


**+**

**9**


**=**

--

Nama: \_\_\_\_\_

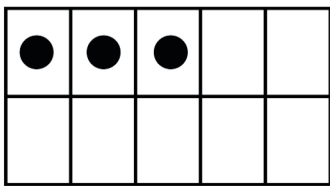
Tarikh: \_\_\_\_\_

# LATIH TUBI OPERASI TAMBAH

Letakkan titik (●) pada setiap ruang petak berdasarkan nilai yang diberi dan selesaikan operasi tambah di bawah.

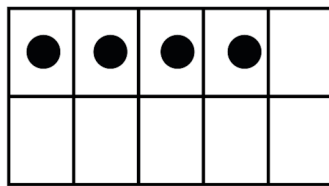
Contoh:

**3**



+

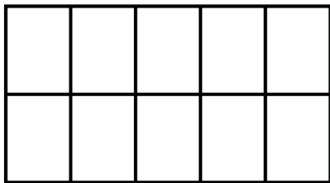
**4**



=

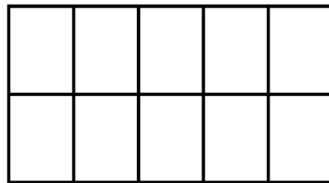
**7**

**5**



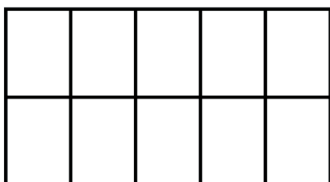
+

**2**



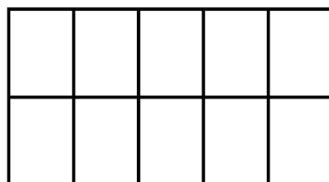
=

**9**



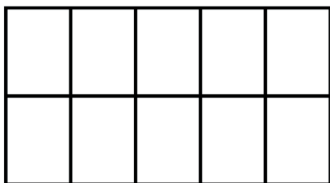
+

**9**



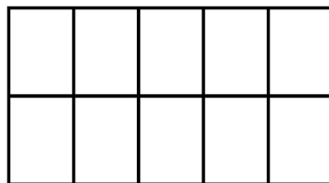
=

**7**



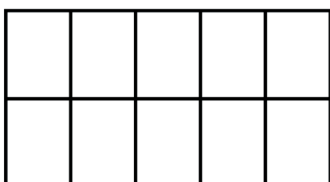
+

**3**



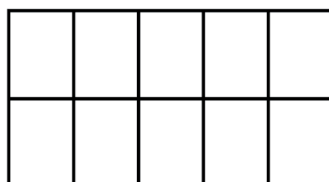
=

**7**



+

**10**



=

Nama: \_\_\_\_\_

Tarikh: \_\_\_\_\_

# LATIH TUBI OPERASI TAMBAH

Letakkan titik (●) pada setiap ruang petak berdasarkan nilai yang diberi dan selesaikan operasi tambah di bawah.

Contoh:

$$\begin{array}{|c|c|c|c|c|} \hline \bullet & \bullet & \bullet & \bullet & \bullet \\ \hline \bullet & \bullet & \bullet & \bullet & \bullet \\ \hline \end{array} + \begin{array}{|c|c|c|c|c|} \hline \bullet & \bullet & \bullet & \bullet & \\ \hline & & & & \\ \hline \end{array} = \boxed{14}$$

$$\begin{array}{|c|c|c|c|c|} \hline & & & & \\ \hline & & & & \\ \hline \end{array} + \begin{array}{|c|c|c|c|c|} \hline & & & & \\ \hline & & & & \\ \hline \end{array} = \boxed{\phantom{00}}$$

$$\begin{array}{|c|c|c|c|c|} \hline & & & & \\ \hline & & & & \\ \hline \end{array} + \begin{array}{|c|c|c|c|c|} \hline & & & & \\ \hline & & & & \\ \hline \end{array} = \boxed{\phantom{00}}$$

$$\begin{array}{|c|c|c|c|c|} \hline & & & & \\ \hline & & & & \\ \hline \end{array} + \begin{array}{|c|c|c|c|c|} \hline & & & & \\ \hline & & & & \\ \hline \end{array} = \boxed{\phantom{00}}$$

$$\begin{array}{|c|c|c|c|c|} \hline & & & & \\ \hline & & & & \\ \hline \end{array} + \begin{array}{|c|c|c|c|c|} \hline & & & & \\ \hline & & & & \\ \hline \end{array} = \boxed{\phantom{00}}$$

Nama: \_\_\_\_\_

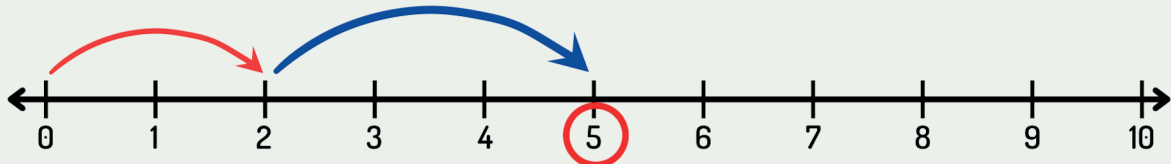
Tarikh: \_\_\_\_\_

## LATIH TUBI OPERASI TAMBAH GARIS NOMBOR

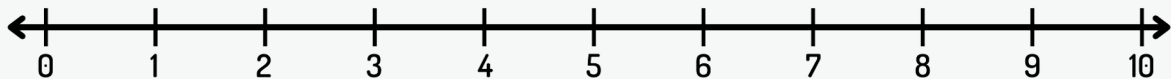
Selesaikan latihan dan tulis jawapan yang betul berdasarkan garis nombor.

Contoh :

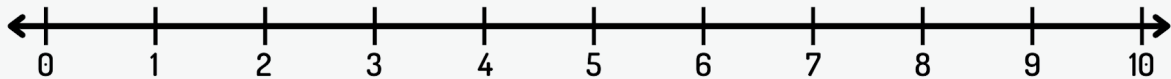
$$2 + 3 = \boxed{5}$$



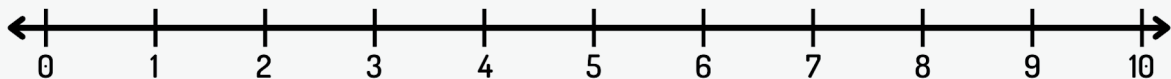
$$3 + 4 = \boxed{\phantom{00}}$$



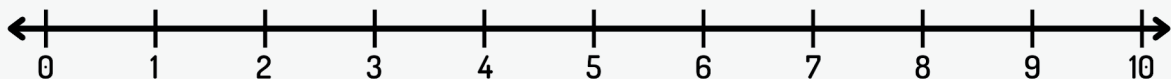
$$5 + 4 = \boxed{\phantom{00}}$$



$$6 + 3 = \boxed{\phantom{00}}$$



$$8 + 1 = \boxed{\phantom{00}}$$



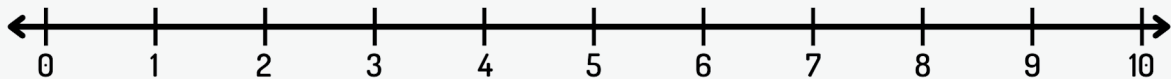
Nama: \_\_\_\_\_

Tarikh: \_\_\_\_\_

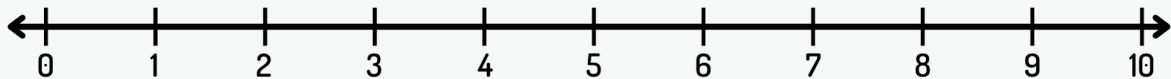
## LATIH TUBI OPERASI TAMBAH GARIS NOMBOR

Selesaikan latihan dan tulis jawapan yang betul berdasarkan garis nombor.

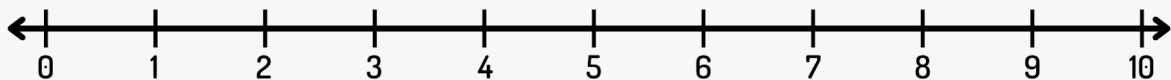
$$2 + 2 + 2 = \square$$



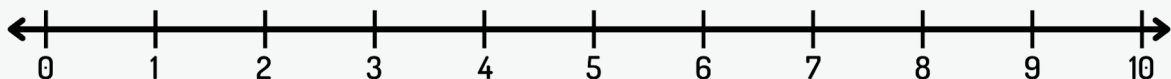
$$4 + 1 + 3 = \square$$



$$5 + 4 + 1 = \square$$



$$2 + 4 + 3 = \square$$



$$1 + 1 + 1 = \square$$

